

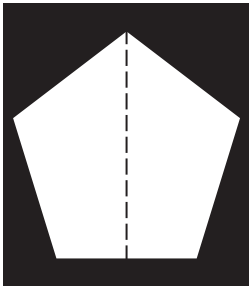


# 2D Geometry

## Activity 3 - Lines of Symmetry

A shape is symmetrical if both parts overlap exactly when it is folded in half. The following are examples of symmetrical polygons. The dotted lines represent the line of symmetry.




---

---


Can you believe THIS is math?

# 2D Geometry


## Activity 3 - Lines of Symmetry - *continued*




# Lines: \_\_\_\_\_




# Lines: \_\_\_\_\_




# Lines: \_\_\_\_\_




# Lines: \_\_\_\_\_




# Lines: \_\_\_\_\_




# Lines: \_\_\_\_\_




# Lines: \_\_\_\_\_



# Lines: \_\_\_\_\_




# Lines: \_\_\_\_\_




# Lines: \_\_\_\_\_




# Lines: \_\_\_\_\_




# Lines: \_\_\_\_\_




# Lines: \_\_\_\_\_



# Lines: \_\_\_\_\_



# Lines: \_\_\_\_\_



# Lines: \_\_\_\_\_

---

Can you believe THIS is math?